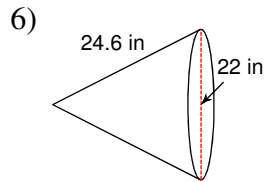
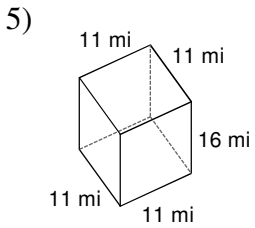
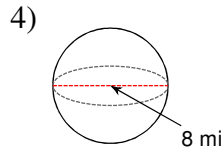
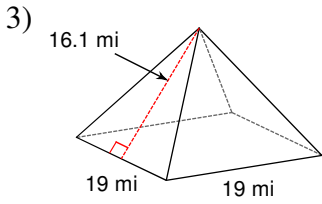
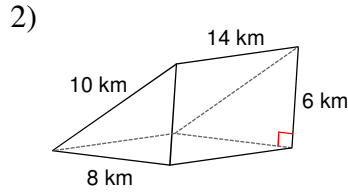
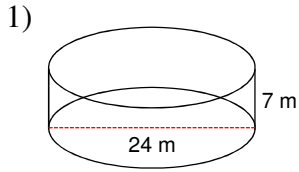


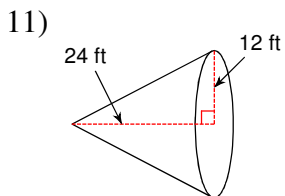
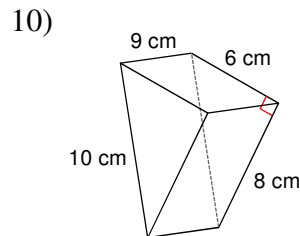
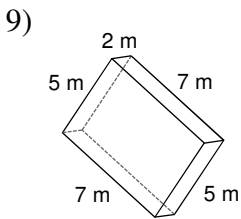
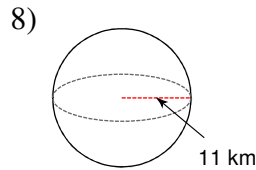
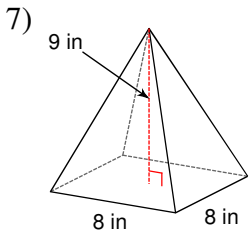
# Surface area and Volume extra practice

© 2013 Kuta Software LLC. All rights reserved.

**Find the surface area of each figure. Round to the nearest tenth.**



**Find the volume of each figure. Round to the nearest tenth.**



## Answers to Surface area and Volume extra practice (ID: 1)

1)  $1432.6 \text{ m}^2$

2)  $384 \text{ km}^2$

3)  $972.8 \text{ mi}^2$

4)  $201.1 \text{ mi}^2$

5)  $946 \text{ mi}^2$

6)  $1230.2 \text{ in}^2$

7)  $192 \text{ in}^3$

8)  $5575.3 \text{ km}^3$

9)  $70 \text{ m}^3$

10)  $216 \text{ cm}^3$

11)  $3619.1 \text{ ft}^3$